

परमाणु उर्जा शिक्षण संस्था, मुंबई
Atomic Energy Education Society
Session 2023 -24

Class : III

Subject :EVS

WORKSHEET NO-1

Name of the chapter: 11.From Here to There

I. Choose the correct answer and fill in the blanks.

1. The slowest means of transport is _____.
a) bus b) train c) bullock cart
2. Besides petrol and diesel, cars and buses can also run on _____.
a) PNG b) CNG c) LPG
3. Only _____ can run on railway tracks.
a) trains b) trucks c) ships
4. Cheapest mode of transport is _____ transport.
a) road b) air c) water
5. There are _____ modes of transport.
a) two b) three c) four

II. Answer the following questions

1. What is meant by roads of iron?

2. What places did the train pass by?

2. Which all the vehicles did the children travel in?

3. What are three means of transport?


III. Group the following vehicles.


Bus, boat, Aeroplane, ship, train, steamer, helicopter, scooter

Travel on road (Land transport)	Travel on water (Water transport)	Travel in air (Air transport)


IV. Write in front of each picture what the vehicle is used for.


Vehicle Used for













Write down the emergency numbers of

- a) Ambulance _____
- b) Police _____
- c) Fire Brigade _____

Circle the odd one out :

- a) Boat , ship ,train , steamer
- b) Bus, bike , scooter, cycle
- c) Aeroplane, helicopter , tractor, jet plane

Arrange the following vehicles from slowest to fastest .

Auto aeroplane bullock cart bicycle train
